

# MATHEMATIC FOR BEGINNER


## I. Fill in the blank with the correct answer

1.




= \_\_\_\_\_ animals

2.



= \_\_\_\_\_ fruits

3.



= \_\_\_\_\_ dolls

4.



= \_\_\_\_\_ aeroplane

5.

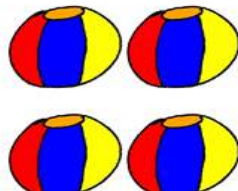
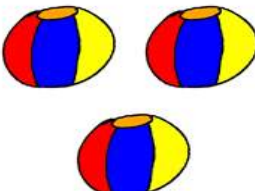



= \_\_\_\_\_ boys




**II. Answer the sums and draw the picture in the box**

6.  +  = 




\_\_\_\_\_ plus \_\_\_\_\_ is \_\_\_\_\_ snowmen

7.  -  = 

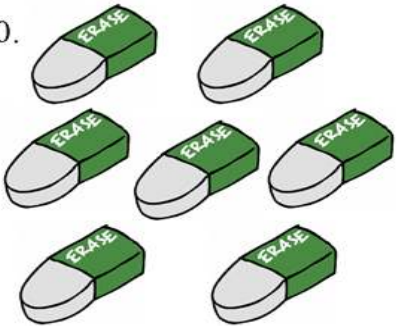
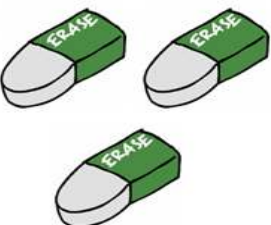

\_\_\_\_\_ minus \_\_\_\_\_ is \_\_\_\_\_ balls

8.  +  = 

\_\_\_\_\_ plus \_\_\_\_\_ is \_\_\_\_\_ rubber ducks

9.  -  = 

\_\_\_\_\_ minus \_\_\_\_\_ is \_\_\_\_\_ flowers

10.  +  = 

\_\_\_\_\_ plus \_\_\_\_\_ is \_\_\_\_\_ erasers

**II. Write down how many animals there are**



11. How many chicken  are there?

12. How many horses  are there?

13. How many ducks  are there?

14. How many cows  are there?

15. How many sheep  are there?